

Year 5 – Set Two

Name Date

1

A crowd of five thousand and seventy people were at a football match.
Before the end of the match, 190 people went home.

How many people stayed until the end?

4880

4980

5510

5690

2



How many millimetres longer than the glue-stick is the pencil?

10

12

15

18

3

The circled number in 6 4 3 . ①9 is worth

one hundredth

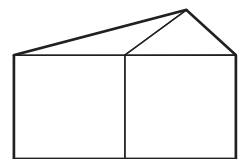
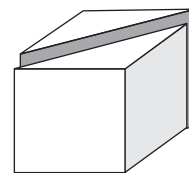
one hundred

one tenth

ten

4

Narene cut this cube in half.
Then she put the pieces together to make a new shape.



new shape

The new shape has edges and faces.

5

How many months are there in three and a half years?

$18\frac{1}{2}$


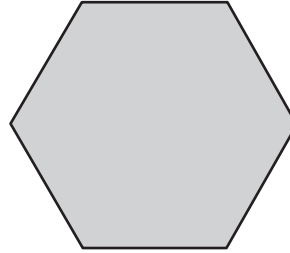
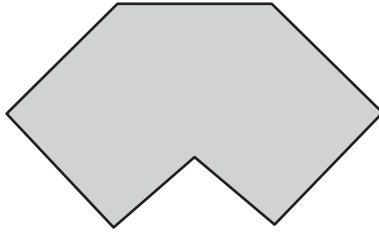
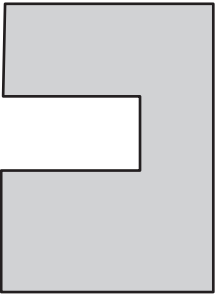
35

$36\frac{1}{2}$

42

6

Which shape is an octagon?



7

Write one number in each blank box to make this number sentence true.

$$\boxed{5} \boxed{4} \boxed{} - \boxed{} \boxed{6} = \boxed{4} \boxed{8} \boxed{7}$$

8

The dotted line shows the line of symmetry of this shape.

Its measurements are shown in centimetres.

What is the perimeter of the shape?

25 cm

41 cm

46 cm

50 cm

